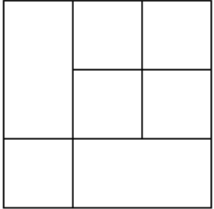


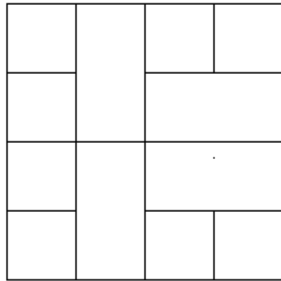
DOMÁCÍ ÚKOL 001 - ZADÁNÍ

1. Kolik je na obrázku čtverců:

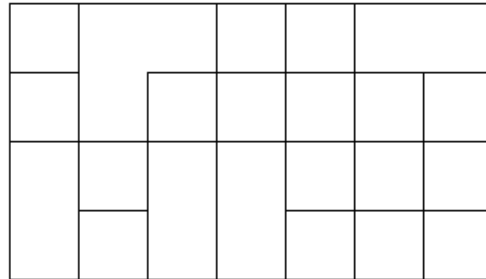
a)



b)

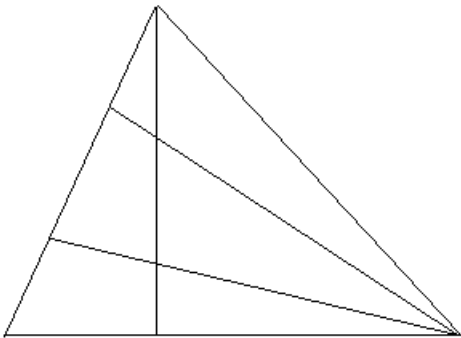


c)



2. Kolik je na obrázku trojúhelníků:

a)



b)

